
1. Circle the correct answer.

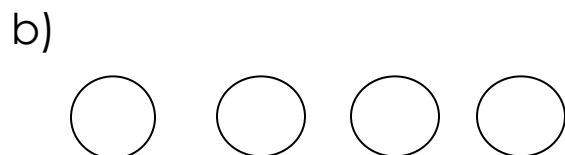
a) six plus three = eight / nine

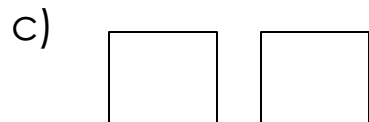
b) seven plus two = eight / ten

c) four plus four = eight / nine




2. Count and write the shapes






















3. Add and then draw the correct number of objects

a)  +  +  =

b)    +   =

c)    +     =

4. Finish the pattern.

a)          _____

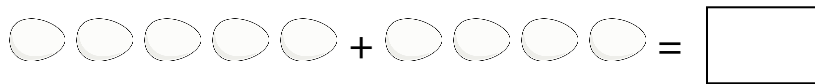
5. Cross out the correct number of objects.

a)         8-3=

6. Circle the heavier objects.

a)   b)  

7. Jack has five eggs. Jill has four eggs. How many eggs do they have altogether?



$$\boxed{} + \boxed{} = \boxed{}$$

8. Find the answer.

a) 39	b) 66
<u>+44</u>	<u>+27</u>

d) 55	f) 66
<u>-29</u>	<u>-38</u>